



Cambridge International Examinations
Cambridge International General Certificate of Secondary Education

CANDIDATE
NAME

CENTRE
NUMBER

--	--	--	--	--

CANDIDATE
NUMBER

--	--	--	--

* 0 1 0 7 9 6 6 4 5 0 *

CHEMISTRY

0620/42

Paper 4 Theory (Extended)

May/June 2018

1 hour 15 minutes

Candidates answer on the Question Paper.

No Additional Materials are required.

READ THESE INSTRUCTIONS FIRST

Write your Centre number, candidate number and name on all the work you hand in.

Write in dark blue or black pen.

You may use an HB pencil for any diagrams or graphs.

Do not use staples, paper clips, glue or correction fluid.

DO **NOT** WRITE IN ANY BARCODES.

Answer **all** questions.

Electronic calculators may be used.

A copy of the Periodic Table is printed on page 12.

You may lose marks if you do not show your working or if you do not use appropriate units.

At the end of the examination, fasten all your work securely together.

The number of marks is given in brackets [] at the end of each question or part question.

The syllabus is approved for use in England, Wales and Northern Ireland as a Cambridge International Level 1/Level 2 Certificate.

This document consists of **11** printed pages and **1** blank page.

1 Give the name of the process that is used:

(a) to obtain water from aqueous sodium chloride

..... [1]

(b) to produce lead from molten lead(II) bromide

..... [1]

(c) to separate an insoluble solid from a liquid

..... [1]

(d) to separate the components of petroleum

..... [1]

(e) to separate a mixture of coloured dyes.

..... [1]

[Total: 5]

2 This question is about the elements in Period 3 of the Periodic Table.

Na	Mg	Al	Si	P	S	Cl	Ar
----	----	----	----	---	---	----	----

For each of the following, identify a Period 3 element which matches the description. Each element may be used once, more than once or not at all.

State which Period 3 element:

(a) forms an oxide with a macromolecular structure

..... [1]

(b) is extracted from the ore bauxite

..... [1]

(c) is soft, metallic and stored in oil

..... [1]

(d) is a green gas at room temperature and pressure

..... [1]

(e) provides an inert atmosphere in lamps

..... [1]

(f) forms **two** different oxides during the Contact process

..... [1]

(g) is non-metallic and an important component of fertilisers.

..... [1]

[Total: 7]

3 Complete the following table.

particle	number of protons	number of electrons	number of neutrons	number of nucleons
${}_{11}^{23}\text{Na}$	11	11	23
${}_{17}^{37}\text{Cl}^{-}$	20
${}_{26}^{56}\text{.....}$	26	24	30	56

[6]

[Total: 6]

4 Potassium reacts with bromine at room temperature to form potassium bromide.

(a) Write a chemical equation for this reaction. Include state symbols.

..... [3]

(b) Potassium bromide exists as an ionic lattice.
Potassium bromide does **not** conduct electricity when solid but does conduct electricity when molten.

(i) What is meant by the term *ionic lattice*?

.....
..... [2]

(ii) Explain why potassium bromide does **not** conduct electricity when solid but does conduct electricity when molten.

.....
.....
..... [2]

(c) Concentrated aqueous potassium bromide is an electrolyte.

(i) What is meant by the term *electrolyte*?

.....
..... [2]

(ii) Describe the electrolysis of concentrated aqueous potassium bromide.

Include:

- an ionic half-equation for the reaction at the cathode
- the name of the product at the anode
- the name of the potassium compound formed.

.....
.....
..... [4]

(iii) When molten potassium bromide is electrolysed, the product at the cathode is different.

Name the product at the cathode when molten potassium bromide is electrolysed.

..... [1]

(d) Iodine reacts with chlorine to form iodine monochloride, ICl , as the only product.

(i) Write a chemical equation for this reaction.

..... [2]

(ii) Draw a dot-and-cross diagram to show the electron arrangement in a molecule of iodine monochloride. Show outer shell electrons only.

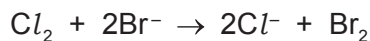
[2]

(e) Potassium bromide has a melting point of 734°C .
Iodine monochloride has a melting point of 27°C .

In terms of attractive forces, explain why there is a large difference between these melting points.

.....
.....
.....
.....
..... [3]

(f) When chlorine gas is passed through aqueous potassium bromide, a redox reaction occurs. The ionic equation is shown.



(i) Write an ionic half-equation showing what happens to the chlorine molecules, Cl_2 , in this reaction.

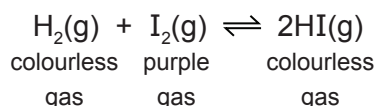
..... [1]

(ii) Explain why the bromide ions, Br^- , act as reducing agents in this reaction.

..... [1]

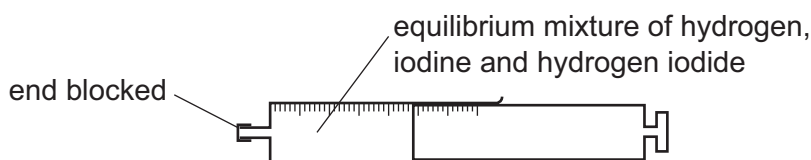
[Total: 23]

- 5 Hydrogen and iodine react together in a reversible reaction. Hydrogen iodide is formed.



The forward reaction is exothermic.

A gas syringe containing an equilibrium mixture of hydrogen, iodine and hydrogen iodide gases was sealed and heated to 250 °C. The equilibrium mixture was a pale purple colour.



- (a) What is meant by the term *equilibrium*?

.....

 [2]

- (b) The plunger of the gas syringe was pressed in while the end of the gas syringe was blocked. This increased the pressure. The position of the equilibrium did **not** change. The colour of the gaseous mixture turned darker purple.

- (i) Give a reason why the position of the equilibrium did **not** change.

..... [1]

- (ii) Suggest why the gaseous mixture turned darker purple, even though the position of the equilibrium did **not** change.

..... [1]

- (c) The temperature of the gas syringe was increased to 300 °C.

- (i) What happened to the **position** of the equilibrium when the temperature of the gas syringe was increased from 250 °C to 300 °C?

..... [1]

- (ii) What happened to the **rate** of the forward reaction and the **rate** of the backward reaction when the temperature of the gas syringe was increased from 250 °C to 300 °C?

rate of the forward reaction

rate of the backward reaction

[2]

[Total: 7]

- 6 (a) All sodium salts are soluble in water. All nitrates are soluble in water. Barium carbonate is insoluble in water.

Describe how you would make a pure, dry sample of barium carbonate by precipitation.

Include:

- the names of the starting materials
- full practical details
- a chemical equation.

.....

.....

.....

.....

.....

..... [5]

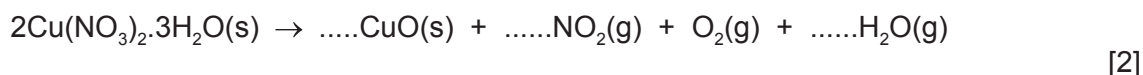
- (b) Nitrates decompose when heated.

- (i) Write a chemical equation for the decomposition of sodium nitrate when it is heated.

..... [2]

- (ii) The unbalanced chemical equation for the decomposition of hydrated copper(II) nitrate crystals is shown.

Balance the chemical equation for this reaction.



- (iii) When the hydrated copper(II) nitrate crystals are heated, steam is produced. When the steam condenses on a cool surface, it turns into a colourless liquid.

Anhydrous cobalt(II) chloride is used to show that the colourless liquid contains water.

How does the colour of the anhydrous cobalt(II) chloride change?

from to [2]

- (iv) How would the student test to determine if the water produced in (b)(iii) is pure?

..... [1]

[Total: 12]

7 Many organic compounds, such as alcohols, carboxylic acids and esters, contain the elements carbon, hydrogen and oxygen only.

(a) Compound **R** has the following composition by mass: C, 60.00%; H, 13.33%; O, 26.67%.

Calculate the empirical formula of compound **R**.

empirical formula = [2]

(b) Compound **S** has the empirical formula C_2H_4O and a relative molecular mass of 88.

Calculate the molecular formula of compound **S**.

molecular formula = [2]

(c) Compounds **T** and **V** both have the molecular formula $C_3H_6O_2$.

- Compound **T** produces bubbles of carbon dioxide gas when it is added to aqueous sodium carbonate.
- Compound **V** is an ester.

(i) What is the name given to compounds with the same molecular formula but different structures?

..... [1]

(ii) Draw the structures of compounds **T** and **V**. Show all of the atoms and all of the bonds.

compound **T**

compound **V**

[2]

(iii) All compounds with the molecular formula $C_3H_6O_2$ can undergo complete combustion in an excess of oxygen.

Complete the chemical equation for this reaction.



[2]

(d) Compound **W** has the molecular formula C_2H_6O . Compound **W** reacts when heated with ethanoic acid and a catalyst to produce a sweet-smelling liquid.

(i) Give the name of the homologous series to which compound **W** belongs.

..... [1]

(ii) Draw the structure of compound **W**. Show all of the atoms and all of the bonds.

[1]

(e) Alkanes and alkenes are hydrocarbons.

(i) What is meant by the term *hydrocarbon*?

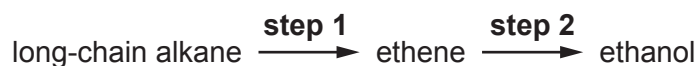
.....
 [2]

(ii) State the general formula of:

alkanes

alkenes [2]

(f) Ethanol can be produced from long-chain alkanes as shown.



Describe the **two-stage** manufacture of ethanol from the long-chain alkane octane, C_8H_{18} .
 Include:

- the names of the types of chemical reactions that occur
- reaction equations
- reaction conditions.

step 1

.....

.....

.....

step 2

.....

.....

..... [5]

[Total: 20]

BLANK PAGE

Permission to reproduce items where third-party owned material protected by copyright is included has been sought and cleared where possible. Every reasonable effort has been made by the publisher (UCLES) to trace copyright holders, but if any items requiring clearance have unwittingly been included, the publisher will be pleased to make amends at the earliest possible opportunity.

To avoid the issue of disclosure of answer-related information to candidates, all copyright acknowledgements are reproduced online in the Cambridge International Examinations Copyright Acknowledgements Booklet. This is produced for each series of examinations and is freely available to download at www.cie.org.uk after the live examination series.

Cambridge International Examinations is part of the Cambridge Assessment Group. Cambridge Assessment is the brand name of University of Cambridge Local Examinations Syndicate (UCLES), which is itself a department of the University of Cambridge.

The Periodic Table of Elements

		Group																																																																																																																																																																																																																																																																																																																																																																																																																																																																																																																																																																																																																																																																																																																																																																																																																																																																																																																																																																																																							
I	II	III	IV	V	VI	VII	VIII																																																																																																																																																																																																																																																																																																																																																																																																																																																																																																																																																																																																																																																																																																																																																																																																																																																																																																																																																																																																		
1	2	3	4	5	6	7	8	9	10	11	12	13	14	15	16	17	18																																																																																																																																																																																																																																																																																																																																																																																																																																																																																																																																																																																																																																																																																																																																																																																																																																																																																																																																																																																								
Li lithium 7	Be beryllium 9	B boron 11	C carbon 12	N nitrogen 14	O oxygen 16	F fluorine 19	Ne neon 20	Na sodium 23	Mg magnesium 24	Al aluminium 27	Si silicon 28	P phosphorus 31	S sulfur 32	Cl chlorine 35.5	Ar argon 40	K potassium 39	Ca calcium 40	Sc scandium 45	Ti titanium 48	V vanadium 51	Cr chromium 52	Mn manganese 55	Fe iron 56	Co cobalt 59	Ni nickel 59	Cu copper 64	Zn zinc 65	Ga gallium 70	Ge germanium 73	As arsenic 75	Se selenium 79	Br bromine 80	Kr krypton 84	Rb rubidium 85	Sr strontium 88	Y yttrium 89	Zr zirconium 91	Nb niobium 93	Mo molybdenum 96	Tc technetium —	Ru ruthenium 101	Rh rhodium 103	Pd palladium 106	Ag silver 108	Cd cadmium 112	In indium 115	Sn tin 119	Sb antimony 122	Te tellurium 128	I iodine 127	Xe xenon 131	Cs caesium 133	Ba barium 137	La lanthanum 139	Hf hafnium 178	Ta tantalum 181	W tungsten 184	Re rhenium 186	Os osmium 190	Ir iridium 192	Pt platinum 195	Au gold 197	Hg mercury 201	Tl thallium 204	Pb lead 207	Bi bismuth 209	Po polonium —	At astatine —	Rn radon —	Fr francium —	Ra radium —	Ac actinium —	Rf rutherfordium —	Db dubnium —	Sg seaborgium —	Bh bohrium —	Hs hassium —	Mt meitnerium —	Ds darmstadtium —	Rg roentgenium —	Cn copernicium —	Fl flerovium —	Lv livermorium —	Uu ununoctium —	Og oganeson —																																																																																																																																																																																																																																																																																																																																																																																																																																																																																																																																																																																																																																																																																																																																																																																																																																																																																																																				
3	4	5	6	7	8	9	10	11	12	13	14	15	16	17	18	19	20	21	22	23	24	25	26	27	28	29	30	31	32	33	34	35	36	37	38	39	40	41	42	43	44	45	46	47	48	49	50	51	52	53	54	55	56	57–71	72	73	74	75	76	77	78	79	80	81	82	83	84	85	86	87	88	89–103	104	105	106	107	108	109	110	111	112	113	114	115	116	117	118	119	120	121	122	123	124	125	126	127	128	129	130	131	132	133	134	135	136	137	138	139	140	141	142	143	144	145	146	147	148	149	150	151	152	153	154	155	156	157	158	159	160	161	162	163	164	165	166	167	168	169	170	171	172	173	174	175	176	177	178	179	180	181	182	183	184	185	186	187	188	189	190	191	192	193	194	195	196	197	198	199	200	201	202	203	204	205	206	207	208	209	210	211	212	213	214	215	216	217	218	219	220	221	222	223	224	225	226	227	228	229	230	231	232	233	234	235	236	237	238	239	240	241	242	243	244	245	246	247	248	249	250	251	252	253	254	255	256	257	258	259	260	261	262	263	264	265	266	267	268	269	270	271	272	273	274	275	276	277	278	279	280	281	282	283	284	285	286	287	288	289	290	291	292	293	294	295	296	297	298	299	300	301	302	303	304	305	306	307	308	309	310	311	312	313	314	315	316	317	318	319	320	321	322	323	324	325	326	327	328	329	330	331	332	333	334	335	336	337	338	339	340	341	342	343	344	345	346	347	348	349	350	351	352	353	354	355	356	357	358	359	360	361	362	363	364	365	366	367	368	369	370	371	372	373	374	375	376	377	378	379	380	381	382	383	384	385	386	387	388	389	390	391	392	393	394	395	396	397	398	399	400	401	402	403	404	405	406	407	408	409	410	411	412	413	414	415	416	417	418	419	420	421	422	423	424	425	426	427	428	429	430	431	432	433	434	435	436	437	438	439	440	441	442	443	444	445	446	447	448	449	450	451	452	453	454	455	456	457	458	459	460	461	462	463	464	465	466	467	468	469	470	471	472	473	474	475	476	477	478	479	480	481	482	483	484	485	486	487	488	489	490	491	492	493	494	495	496	497	498	499	500	501	502	503	504	505	506	507	508	509	510	511	512	513	514	515	516	517	518	519	520	521	522	523	524	525	526	527	528	529	530	531	532	533	534	535	536	537	538	539	540	541	542	543	544	545	546	547	548	549	550	551	552	553	554	555	556	557	558	559	560	561	562	563	564	565	566	567	568	569	570	571	572	573	574	575	576	577	578	579	580	581	582	583	584	585	586	587	588	589	590	591	592	593	594	595	596	597	598	599	600	601	602	603	604	605	606	607	608	609	610	611	612	613	614	615	616	617	618	619	620	621	622	623	624	625	626	627	628	629	630	631	632	633	634	635	636	637	638	639	640	641	642	643	644	645	646	647	648	649	650	651	652	653	654	655	656	657	658	659	660	661	662	663	664	665	666	667	668	669	670	671	672	673	674	675	676	677	678	679	680	681	682	683	684	685	686	687	688	689	690	691	692	693	694	695	696	697	698	699	700	701	702	703	704	705	706	707	708	709	710	711	712	713	714	715	716	717	718	719	720	721	722	723	724	725	726	727	728	729	730	731	732	733	734	735	736	737	738	739	740	741	742	743	744	745	746	747	748	749	750	751	752	753	754	755	756	757	758	759	760	761	762	763	764	765	766	767	768	769	770	771	772	773	774	775	776	777	778	779	780	781	782	783	784	785	786	787	788	789	790	791	792	793	794	795	796	797	798	799	800	801	802	803	804	805	806	807	808	809	810	811	812	813	814	815	816	817	818	819	820	821	822	823	824	825	826	827	828	829	830	831	832	833	834	835	836	837	838	839	840	841	842	843	844	845	846	847	848	849	850	851	852	853	854	855	856	857	858	859	860	861	862	863	864	865	866	867	868	869	870	871	872	873	874	875	876	877	878	879	880	881	882	883	884	885	886	887	888	889	890	891	892	893	894	895	896	897	898	899	900	901	902	903	904	905	906	907	908	909	910	911	912	913	914	915	916	917	918	919	920	921	922	923	924	925	926	927	928	929	930	931	932	933	934	935	936	937	938	939	940	941	942	943	944	945	946	947	948	949	950	951	952	953	954	955	956	957	958	959	960	961	962	963	964	965	966	967	968	969	970	971	972	973	974	975	976	977	978	979	980	981	982	983	984	985	986	987	988	989	990	991	992	993	994	995	996	997	998	999	1000

Key

atomic number
atomic symbol
name
relative atomic mass

lanthanoids

actinoids

The volume of one mole of any gas is 24 dm³ at room temperature and pressure (r.t.p.).