

Test of Mathematics for University Admission, 2021 Paper 1

Worked Solutions

Version 1.0, March 2022

Contents

Introduction for students	2
Question 1	3
Question 2	4
Question 3	5
Question 4	6
Question 5	7
Question 6	8
Question 7	9
Question 8	10
Question 9	11
Question 10	12
Question 11	13
Question 12	14
Question 13	15
Question 14	16
Question 15	18
Question 16	19
Question 17	20
Question 18	21
Question 19	22
Question 20	23

Introduction for students

These solutions are designed to support you as you prepare to take the Test of Mathematics for University Admission. They are intended to help you understand how to answer the questions, and therefore you are strongly encouraged to **attempt the questions first** before looking at these worked solutions. For this reason, each solution starts on a new page, so that you can avoid looking ahead.

The solutions contain much more detail and explanation than you would need to write in the test itself – after all, the test is multiple choice, so no written solutions are needed, and you may be very fluent at some of the steps spelled out here. Nevertheless, doing too much in your head might lead to making unnecessary mistakes, so a healthy balance is a good target!

There may be alternative ways to correctly answer these questions; these are not meant to be ‘definitive’ solutions.

The questions themselves are available on the ‘**Preparing for the test**’ section on the Admissions Testing website.

Question 1

Approach 1: using the equations of the circles

We can find the equation by solving the equations of the circles simultaneously.

The equations are

$$\begin{aligned}(x + 2)^2 + (y - 1)^2 &= r^2 \\ (x - 3)^2 + (y + 2)^2 &= r^2\end{aligned}$$

(We do not know the radius, so we have called it r ; we are given that both circles have the same radius.)

We can expand the brackets to give

$$\begin{aligned}x^2 + 4x + 4 + y^2 - 2y + 1 &= r^2 \\ x^2 - 6x + 9 + y^2 + 4y + 4 &= r^2\end{aligned}$$

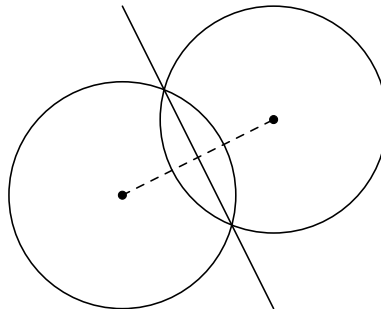
Subtracting these equations then gives an equation which must be satisfied by any points lying on both circles:

$$10x - 6y - 8 = 0$$

which simplifies to $5x - 3y = 4$, and so the answer is F.

Approach 2: using geometry

The circles have the same radius, so by symmetry, the straight line through the two points of intersection must be the perpendicular bisector of the line segment joining the two circle centres, as shown in this diagram:



In our case, the two centres are at $(-2, 1)$ and $(3, -2)$, so the midpoint is as $(\frac{1}{2}, -\frac{1}{2})$. The gradient of the line joining the centres is $\frac{-2-1}{3-(-2)} = -\frac{3}{5}$. Therefore the gradient of the perpendicular bisector is $\frac{5}{3}$, and it has equation

$$y - (-\frac{1}{2}) = \frac{5}{3}(x - \frac{1}{2})$$

Multiplying by 3 gives

$$3y + \frac{3}{2} = 5(x - \frac{1}{2})$$

which rearranges to give

$$5x - 3y = 4$$

which is option F.

Question 2

We first find the turning points by differentiation. We have

$$\frac{dy}{dx} = 3x^2 - 6 = 0 \text{ if and only if } x^2 = 2$$

so $\alpha = -\sqrt{2}$ and $\beta = \sqrt{2}$.

We can now compute the integral:

$$\begin{aligned} \int_{\alpha}^{\beta} x^3 - 6x + 3 \, dx &= \left[\frac{1}{4}x^4 - 3x^2 + 3x \right]_{-\sqrt{2}}^{\sqrt{2}} \\ &= \left(\frac{1}{4}(\sqrt{2})^4 - 3(\sqrt{2})^2 + 3(\sqrt{2}) \right) - \left(\frac{1}{4}(-\sqrt{2})^4 - 3(-\sqrt{2})^2 + 3(-\sqrt{2}) \right) \\ &= 6\sqrt{2} \end{aligned}$$

where to get the last line, we note that the first terms in each bracket cancel with each other, and similarly for the second terms, so we are left with just $3\sqrt{2} - (-3\sqrt{2})$. This is option F.

Question 3

Let us write the arithmetic progression as

$$\frac{1}{2}, \quad \frac{1}{2} + d, \quad \frac{1}{2} + 2d, \quad \frac{1}{2} + 3d, \quad \dots$$

and the geometric progression as

$$\frac{1}{2}, \quad \frac{1}{2}r, \quad \frac{1}{2}r^2, \quad \frac{1}{2}r^3, \quad \dots$$

Then the given information about the second terms and third terms can be written algebraically as

$$\frac{1}{2} + d + \frac{1}{2}r = \frac{1}{2}$$

$$\frac{1}{2} + 2d + \frac{1}{2}r^2 = \frac{1}{8}$$

The first equation simplifies to give $d + \frac{1}{2}r = 0$, so $d = -\frac{1}{2}r$. We can then substitute this into the second equation to give

$$\frac{1}{2} + \frac{1}{2}r^2 - r = \frac{1}{8}$$

(We could equivalently have eliminated d by subtracting twice the first equation from the second.) Multiplying by 8 and rearranging slightly gives

$$4r^2 - 8r + 3 = 0.$$

We can solve this by factorising or using the formula, for example; this gives

$$r = \frac{8 \pm \sqrt{(-8)^2 - 4 \times 4 \times 3}}{2 \times 4} = \frac{1}{2} \text{ or } \frac{3}{2}$$

Since the geometric progression is convergent, we must have $|r| < 1$, so $r = \frac{1}{2}$ and the sum to infinity is

$$S_{\infty} = \frac{a}{1 - r} = \frac{\left(\frac{1}{2}\right)}{1 - \frac{1}{2}} = 1$$

so the answer is option G.

Question 4

This function is a quadratic in $u = 2^x$; we can rewrite it as

$$u^2 - 2^3u + 4$$

or

$$u^2 - 8u + 4.$$

We can complete the square to express this as

$$(u - 4)^2 - 4^2 + 4 = (u - 4)^2 - 12.$$

The minimum therefore occurs when $u = 4$, at which point the function value is 12.

We must also check that this value can actually be attained: $u = 4$ if and only if $2^x = 4$, which happens when $x = 2$, so this minimum is attained, and the correct answer is B.

The minimum can also be found using calculus: differentiating $u^2 - 8u + 4$ gives $2u - 8$; this is zero when $u = 4$, at which point the function value is $4^2 - 8 \times 4 + 4 = -12$; this is a minimum as the function is a quadratic with positive u^2 coefficient.

Question 5

We can rewrite $f(9)$, $f(16)$ and $f(24)$ using the information given about the function:

$$\begin{aligned} f(9) &= f(3 \times 3) \\ &= f(3)f(3) && \text{as 9 is a multiple of 3} \\ f(16) &= f(16 \times 1) \\ &= 16 && \text{as 16 is not a multiple of 3} \\ f(24) &= f(3 \times 8) \\ &= f(3)f(8) && \text{as 24 is a multiple of 3} \\ &= f(3)f(8 \times 1) \\ &= f(3) \times 8 && \text{as 8 is not a multiple of 3} \\ &= 8f(3) \end{aligned}$$

Substituting these into the given equation then gives

$$(f(3))^2 + 16 - 8f(3) = 0$$

which is a quadratic in $f(3)$; we can factorise it to give

$$(f(3) - 4)^2 = 0$$

which has one (repeated) solution: $f(3) = 4$. Hence the answer is option F.

Question 6

This is almost a function in $\cos x$ except for the $\sin^2 x$ term, so we rewrite this in terms of $\cos x$:

$$f(x) = \frac{\cos x + 3}{7 + 5 \cos x - (1 - \cos^2 x)} = \frac{\cos x + 3}{6 + 5 \cos x + \cos^2 x}$$

We can then factorise the denominator to give

$$f(x) = \frac{\cos x + 3}{(\cos x + 2)(\cos x + 3)}$$

and the $\cos x + 3$ factor cancels. (We should also check that this can never be zero; if it were, the function would be undefined at some points.) Therefore we can write

$$f(x) = \frac{1}{\cos x + 2}$$

The maximum value of this function occurs where $\cos x = -1$, giving $f(x) = 1$, and the minimum value occurs where $\cos x = +1$, giving $f(x) = \frac{1}{3}$. The difference between the minimum and maximum values is therefore $1 - \frac{1}{3} = \frac{2}{3}$, which is option D.

Question 7

Let us start with the condition $xf(x) > 0$ for all non-zero values of x . When $x > 0$, this means that $f(x) > 0$, as we can divide the inequality by x and the direction of the inequality is unchanged. On the other hand, when $x < 0$, this gives $f(x) < 0$, since dividing by x now changes the direction of the inequality. In summary:

$$\begin{aligned} f(x) &> 0 \text{ when } x > 0 \\ f(x) &= 0 \text{ when } x = 0 \\ f(x) &< 0 \text{ when } x < 0 \end{aligned}$$

Now let us turn to the integrals. The final question asks about an integral from -2 to 0 , so we would do well to split the two given integrals into the ranges -2 to 0 and 0 to 2 :

$$\begin{aligned} \int_{-2}^2 f(x) \, dx &= \int_{-2}^0 f(x) \, dx + \int_0^2 f(x) \, dx \\ &= 4 \end{aligned}$$

$$\begin{aligned} \int_{-2}^2 |f(x)| \, dx &= \int_{-2}^0 |f(x)| \, dx + \int_0^2 |f(x)| \, dx \\ &= \int_{-2}^0 -f(x) \, dx + \int_0^2 f(x) \, dx \\ &= -\int_{-2}^0 f(x) \, dx + \int_0^2 f(x) \, dx \\ &= 8 \end{aligned}$$

Therefore

$$\begin{aligned} \int_{-2}^0 f(x) \, dx + \int_0^2 f(x) \, dx &= 4 \\ -\int_{-2}^0 f(x) \, dx + \int_0^2 f(x) \, dx &= 8 \end{aligned}$$

If we now add these two simultaneous equations together, the $\int_{-2}^0 f(x) \, dx$ terms cancel and we are left with $2 \int_0^2 f(x) \, dx = 12$, so $\int_0^2 f(x) \, dx = 6$ and $\int_{-2}^0 f(x) \, dx = -2$.

The question asks us to evaluate $\int_{-2}^0 f(|x|) \, dx$. Thinking about graph transformations, the graph of $y = f(x)$ is transformed into the graph of $y = f(|x|)$ by removing the left half of the graph (left of the y -axis) and reflecting the right half of the graph in the y -axis (the line $x = 0$). The integral of this transformed function from -2 to 0 is therefore equal to the integral of the original function from 0 to 2 , thus

$$\int_{-2}^0 f(|x|) \, dx = \int_0^2 f(x) \, dx = 6$$

and the correct option is G.

Question 8

A straight line meets a quadratic at exactly one point if and only if there is a repeated root to the simultaneous equations. Substituting for y in the first pair gives

$$2x + 3 = x^2 + bx + c.$$

This rearranges to $x^2 + (b - 2)x + (c - 3) = 0$. As this has a repeated root, its discriminant must be zero, so

$$(b - 2)^2 - 4(c - 3) = 0.$$

The second line likewise gives $(b - 4)^2 - 4(c + 2) = 0$. Expanding and simplifying these two equations gives the following simultaneous equations for b and c :

$$b^2 - 4b - 4c = -16$$

$$b^2 - 8b - 4c = -8$$

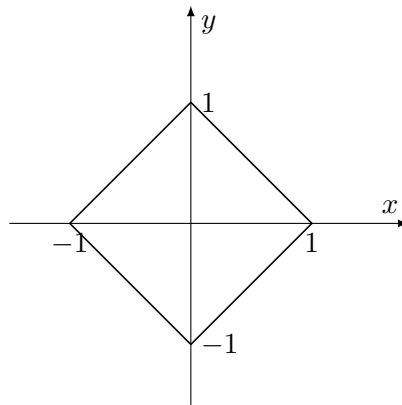
Subtracting these two equations gives $4b = -8$ so $b = -2$ and hence $c = 7$. Therefore $b - c = -9$, which is option A.

Question 9

We first need to work out what the graph looks like. There are four cases for x and y depending on whether there are positive or negative. We list them in a table:

quadrant	x	y	$ x $	$ y $	equation	rearranged to $y = \dots$
1st	+	+	x	y	$x + y = 1$	$y = -x + 1$
2nd	-	+	$-x$	y	$-x + y = 1$	$y = x + 1$
3rd	-	-	$-x$	$-y$	$-x - y = 1$	$y = -x - 1$
4th	+	-	x	$-y$	$x - y = 1$	$y = x - 1$

We therefore have (at most) four lines making up this graph, and we can sketch these. We need to recall that we only draw the part of each line that appears within the relevant quadrant; for example, $y = x + 1$ only appears in the 2nd quadrant.



This shape is a square. We can think of it as made up of 4 right angled triangles, each with base and height equal to 1, so each has area $\frac{1}{2} \times 1 \times 1 = \frac{1}{2}$, and hence the square has area 2. Thus the correct option is C.

Question 10

The interval has width $2 - \frac{1}{2} = \frac{3}{2}$, so each strip will have width $\frac{1}{2}$. The boundaries of the three strips will be at $\frac{1}{2}$, 1, $\frac{3}{2}$ and 2. The trapezium rule then gives the estimate (writing $f(x) = 2 \log_{10} x$):

$$\int_{\frac{1}{2}}^2 f(x) \, dx \approx \frac{1}{2} \times \frac{1}{2} (f(\frac{1}{2}) + 2f(1) + 2f(\frac{3}{2}) + f(2))$$

We can now work out the individual function values:

$$\begin{aligned} f(\frac{1}{2}) &= 2 \log_{10} \frac{1}{2} = -2 \log_{10} 2 \\ f(1) &= 2 \log_{10} 1 = 0 \\ f(\frac{3}{2}) &= 2 \log_{10} \frac{3}{2} = 2 \log_{10} 3 - 2 \log_{10} 2 \\ f(2) &= 2 \log_{10} 2 \end{aligned}$$

Therefore we get the approximation

$$\begin{aligned} \int_{\frac{1}{2}}^2 f(x) \, dx &\approx \frac{1}{2} \times \frac{1}{2} (-2 \log_{10} 2 + 2 \times 0 + 2(2 \log_{10} 3 - 2 \log_{10} 2) + 2 \log_{10} 2) \\ &= \frac{1}{4} (4 \log_{10} 3 - 4 \log_{10} 2) \\ &= \log_{10} 3 - \log_{10} 2 \\ &= \log_{10} \frac{3}{2} \end{aligned}$$

which is option B.

Question 11

The function is decreasing when $f'(x) < 0$ (and possibly also at points where $f'(x) = 0$). We have

$$f(x) = x^{15/7} - x^{8/7} + x^{1/7}$$

so

$$\begin{aligned} f'(x) &= \frac{15}{7}x^{8/7} - \frac{8}{7}x^{1/7} + \frac{1}{7}x^{-6/7} \\ &= \frac{1}{7}x^{-6/7}(15x^2 - 8x + 1) \\ &= \frac{1}{7}x^{-6/7}(5x - 1)(3x - 1) \end{aligned}$$

This is negative when $(5x - 1)(3x - 1) < 0$ (note that we are only considering the region $x > 0$ here).

We note that $(5x - 1)(3x - 1) = 0$ exactly when $x = \frac{1}{5}$ or $x = \frac{1}{3}$ and is therefore negative when $\frac{1}{5} < x < \frac{1}{3}$. Therefore the function $f(x)$ is decreasing when $\frac{1}{5} < x < \frac{1}{3}$ (and possibly also at the endpoints of this interval).

Thus the fraction of the interval $0 < x < 1$ for which $f(x)$ is decreasing is $\frac{1}{3} - \frac{1}{5} = \frac{2}{15}$, which is option A.

Question 12

We can complete the square with the first function: we have

$$x^4 - p^2x^2 = (x^2 - \frac{1}{2}p^2)^2 - \frac{1}{4}p^4$$

This attains its minimum value when the parenthesised expression is 0, that is when $x = \pm \frac{1}{\sqrt{2}}p$. At that point, $x^4 - p^2x^2 = -\frac{1}{4}p^4 = -9$, so $p^4 = 36$. Since p is a real number, we must have $p^2 = 6$ (rather than -6).

We now consider $x^2 - px + 6$. We can again complete the square to get

$$x^2 - px + 6 = (x - \frac{1}{2}p)^2 - \frac{1}{4}p^2 + 6.$$

The minimum of this function again occurs when the parenthesised expression is 0, that is when $x = \frac{1}{2}p$. At this point,

$$x^2 - px + 6 = -\frac{1}{4}p^2 + 6 = -\frac{1}{4} \times 6 + 6 = \frac{9}{2}$$

and so the answer is option E.

Alternatively, we could have used calculus instead of completing the square to find the minima; the results would be the same.

Question 13

Let us first work out the value of the integral in the summation (the summand). We have

$$\begin{aligned} \int_0^r f(x) \, dx &= \int_0^1 f(x) \, dx + \int_1^2 f(x) \, dx + \cdots + \int_{r-1}^r f(x) \, dx \\ &= (0 + 1) + (1 + 1) + \cdots + ((r - 1) + 1) \\ &= 1 + 2 + \cdots + r \\ &= \frac{1}{2}r(r + 1). \end{aligned}$$

We are thus being asked to evaluate

$$\sum_{r=1}^8 \frac{1}{2}r(r + 1).$$

There are algebraic methods to do this (as mentioned below), but they are not on the specification. The most straightforward approach here is to just perform the calculation manually:

$$\sum_{r=1}^8 \frac{1}{2}r(r + 1) = 1 + 3 + 6 + 10 + 15 + 21 + 28 + 36 = 120,$$

which is option C.

In general, it turns out that

$$\sum_{r=1}^n \frac{1}{2}r(r + 1) = \frac{1}{6}n(n + 1)(n + 2).$$

The expressions $r(r + 1)$ and $n(n + 1)(n + 2)$ are known as *rising powers*, and can be written as $r^{\overline{2}}$ and $n^{\overline{3}}$ respectively. On multiplying by 2, the formula then becomes

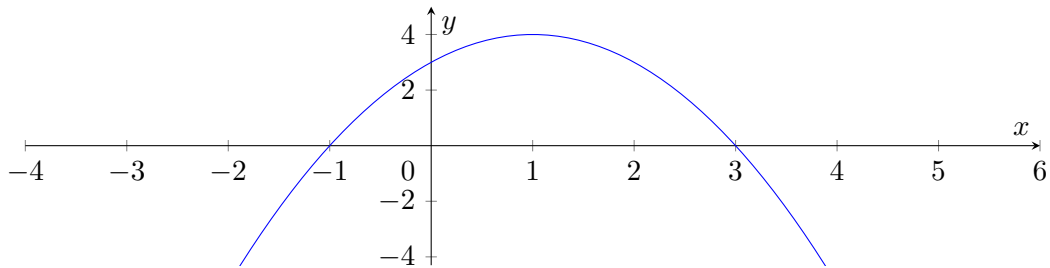
$$\sum_{r=1}^n r^{\overline{2}} = \frac{1}{3}n^{\overline{3}},$$

which looks very similar to the calculus formula $\int_0^x t^2 \, dt = \frac{1}{3}x^3$. There is a much longer discussion of sums such as this in Graham, Knuth and Patashnik, *Concrete Mathematics*.

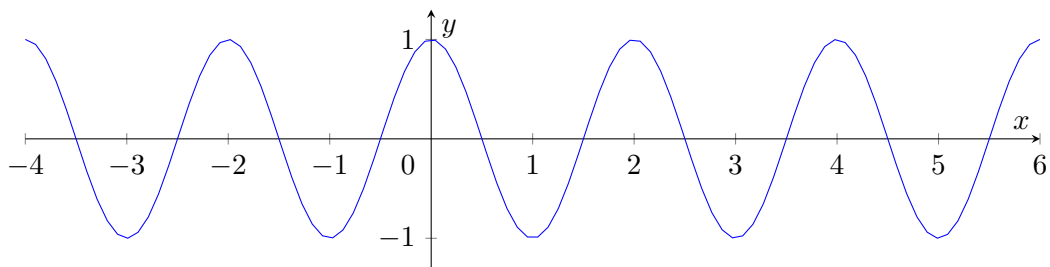
Question 14

We do not know a method of solving equations involving both trigonometric functions (on the right-hand side) and quadratics (on the left-hand side), but the question only asks us to count the number of solutions, not to solve the equation. So we will instead sketch the graphs of the left-hand and right-hand sides and see how many times they intersect.

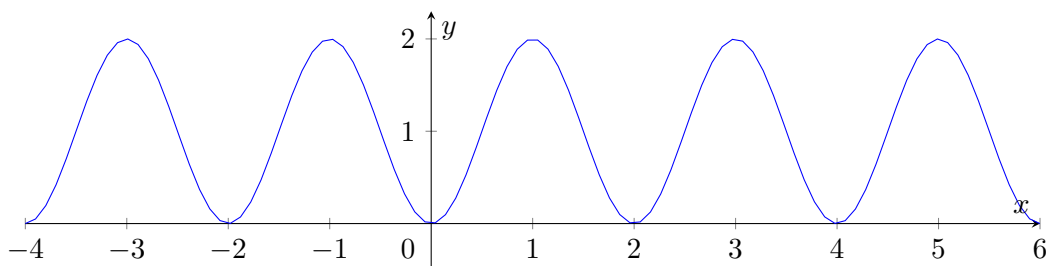
The graph of $y = (x+1)(3-x)$ is a quadratic with roots at $x = -1$ and $x = 3$. When expanded, it becomes $y = -x^2 + \dots$, so it has a maximum point midway between the roots, at $x = 1$, $y = 4$.



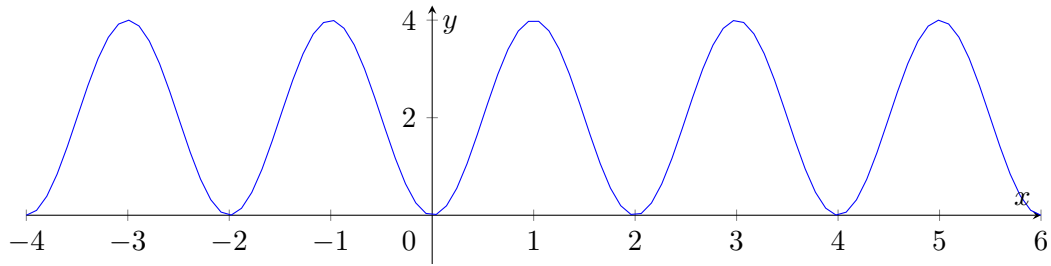
The graph of $y = 2(1 - \cos(\pi x))$ is a transformed cosine graph. $y = \cos(\pi x)$ has a period of 2: it is the graph of $y = \cos x$ scaled by a factor of $1/\pi$ in the x -direction, and looks like this:



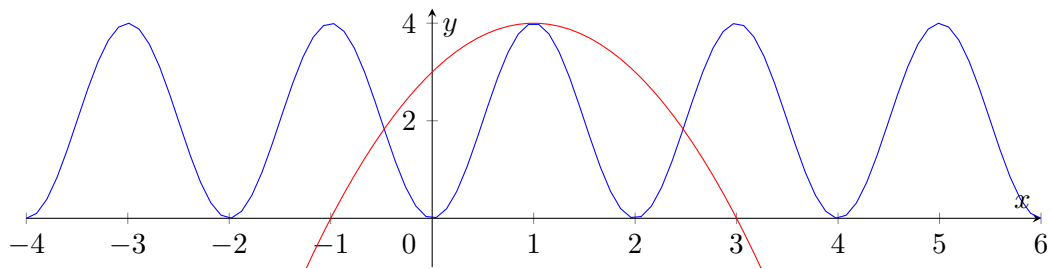
We can then work out the graph of $y = 1 - \cos(\pi x)$ by calculating the values of y at a few key points, or by observing that the graph of $y = -\cos(\pi x)$ is the reflection of $y = \cos(\pi x)$ in the x -axis, and then $y = 1 - \cos(\pi x)$ is this translated by 1 unit in the y -direction. The result is:



Finally, the graph of $y = 2(1 - \cos(\pi x))$ is the previous graph scaled by a factor of 2 in the y -direction:

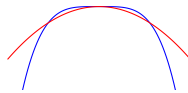


We can now superimpose the graph of $y = (x + 1)(3 - x)$ on top of $y = 2(1 - \cos(\pi x))$. We see that the trigonometric graph is never below the x -axis, so the only possible points of intersection are between $x = -1$ and $x = 3$. There is one point of intersection at $(1, 4)$, one between $x = -1$ and $x = 0$ and one between $x = 2$ and $x = 3$, so there are three points of intersection in total.



Thus the correct answer is option B.

You might wonder about a subtle point: we see that the two graphs touch each other at $(1, 4)$, but how do we know that the trigonometric graph is ‘sharper’ there, so does not also cross the quadratic graph close to $x = 1$, something like this:



This is a plausible possibility, but it turns out not to be the case for reasons that are beyond the scope of the specification.

Question 15

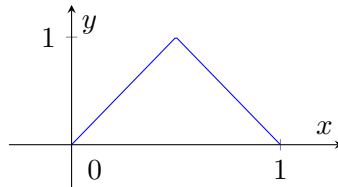
We can write the integral out in full by substituting the value of $g(x)$:

$$\begin{aligned} \int_0^1 g(x) \, dx &= \int_0^1 \sum_{r=1}^{10} f(2^{r-1}x) \, dx \\ &= \int_0^1 f(2^0x) + f(2^1x) + f(2^2x) + \dots + f(2^9x) \, dx \\ &= \int_0^1 f(2^0x) \, dx + \int_0^1 f(2^1x) \, dx + \int_0^1 f(2^2x) \, dx + \dots + \int_0^1 f(2^9x) \, dx \end{aligned}$$

So we can calculate the integral of $g(x)$ if we can calculate the integral of each $f(2^{r-1}x)$.

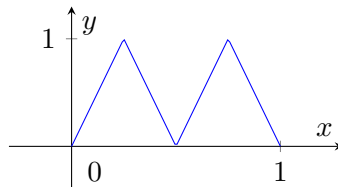
Now $\int_0^1 f(2^0x) \, dx = \int_0^1 f(x) \, dx$ is just the area under the graph of $y = f(x)$ between $x = 0$ and $x = 1$, which is $\frac{1}{2}$ (it is a right angled triangle with base and height both 1).

To work out $\int_0^1 f(2x) \, dx$, we consider the graph of $y = f(2x)$. This is the graph of $y = f(x)$ scaled by a factor of $1/2$ in the x -direction, so looks like this:

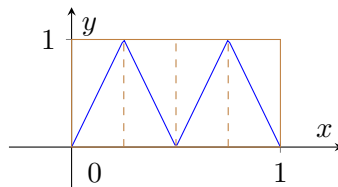


The area between $x = 0$ and $x = 1$ is again $\frac{1}{2}$.

The graph of $y = f(2^2x)$ between $x = 0$ and $x = 1$ consists of two triangles:



Helpfully, the area under this graph is still $\frac{1}{2}$: this is perhaps easiest to see by noticing that we can draw a rectangle (actually a square) around the graph:



In each rectangular slice, half of the area is below the graph and half is above, so the total area below the graph is $\frac{1}{2}$.

This same reasoning will apply for each of the functions $f(2^{r-1}x)$, and so the total area is $10 \times \frac{1}{2} = 5$, which is option C.

Question 16

We can expand the binomial expression in ascending powers of x using the binomial theorem:

$$(a + bx)^n = a^n + \binom{n}{1}a^{n-1}bx + \binom{n}{2}a^{n-2}b^2x^2 + \binom{n}{3}a^{n-3}b^3x^3 + \dots + \binom{n}{n-1}ab^{n-1}x^{n-1} + b^n x^n$$

The third term in ascending powers of x is $\binom{n}{2}a^{n-2}b^2x^2 = 105x^2$.

The fourth term in ascending powers of x is $\binom{n}{3}a^{n-3}b^3x^3 = 210x^3$.

The fourth term in descending powers of x is $\binom{n}{n-3}a^3b^{n-3}x^{n-3} = 210x^3$.

From the last statement, we see that $n = 6$. Then the first two statements give:

$$\begin{aligned} \binom{6}{2}a^4b^2 &= 105 \\ \binom{6}{3}a^3b^3 &= 210 \end{aligned}$$

Now $\binom{6}{2} = 15$ and $\binom{6}{3} = 20$, so

$$\begin{aligned} a^4b^2 &= 7 \\ a^3b^3 &= \frac{21}{2} \end{aligned}$$

Dividing these two equations gives

$$\frac{a}{b} = \frac{2}{3}$$

and so $\left(\frac{a}{b}\right)^2 = \frac{4}{9}$, which is option B.

Question 17

We note that $x^2 + y^2 \geq 0$ for all x and y , so we need only consider non-negative values of $x^2 + y^2$ that satisfy this equation. Those with $x^2 + y^2 \leq 8\pi$ are

$$x^2 + y^2 = \frac{\pi}{6}, \frac{5\pi}{6}, \frac{13\pi}{6}, \frac{17\pi}{6}, \frac{25\pi}{6}, \frac{29\pi}{6}, \frac{37\pi}{6}, \frac{41\pi}{6}$$

(These were obtained by noting that the solutions with $x^2 + y^2 \leq 2\pi$ are $\frac{\pi}{6}$ and $\frac{5\pi}{6}$, and then adding multiples of $2\pi = \frac{12\pi}{6}$ to these.)

Consider the first value; $x^2 + y^2 = \frac{\pi}{6}$; this is a circle with radius $\sqrt{\pi/6}$. Likewise, the other circles have radii $\sqrt{5\pi/6}, \dots, \sqrt{41\pi/6}$. Taking out a common factor of $\sqrt{\pi/6}$, we see that the circles have radii:

$$\rho\sqrt{\frac{\pi}{6}}, \quad \rho = 1, \sqrt{5}, \sqrt{13}, \sqrt{17}, \sqrt{25}, \sqrt{29}, \sqrt{37}, \sqrt{41}$$

We can approximate these square roots to get an idea of how they grow:

$$\rho \approx 1, 2, 3.5, 4, 5, 5.5, 6, 6.5$$

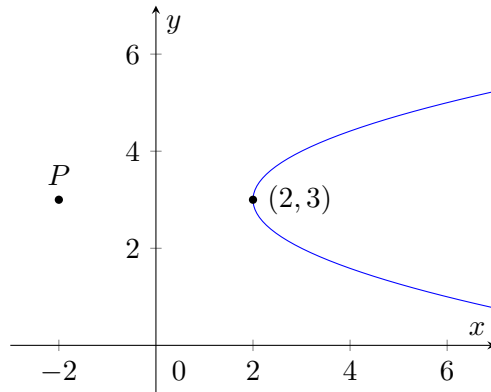
So the smallest three circles are quite far apart, but after that, they get closer and closer, which is graph A. (We can be more precise than this, and observe that the circles appear in close pairs with larger gaps between the pairs, but that is not needed to answer this question.)

Question 18

We should start by sketching the original curve. This is a quadratic in y . It does not factorise, but we can complete the square:

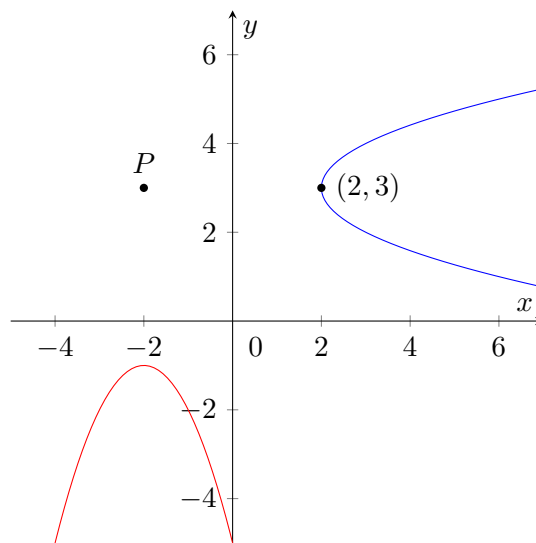
$$x = (y - 3)^2 + 2$$

It therefore has its vertex at $y = 3$, $x = 2$, and $x \geq 2$ for all values of y . We can then sketch it:



The vertex of the parabola is 4 units to the right of P .

Now rotating this by 90° clockwise about P moves the vertex to 4 units below P , that is $(-2, -1)$, giving the following:



This curve then has equation $y = -(x + 2)^2 - 1$, which we can expand to $y = -x^2 - 4x - 5$ giving option B.

Question 19

We can start by solving the equation before considering the possible values of x .

We have

$$\sin(4^{\cos\theta} \times 60^\circ) = \pm \frac{\sqrt{3}}{2}$$

so that

$$4^{\cos\theta} \times 60^\circ = 60^\circ, 120^\circ, 240^\circ, 300^\circ, \dots$$

(noting that the left hand side is always positive, so we do not need to consider negative values for the right hand side).

Dividing by 60° gives

$$4^{\cos\theta} = 1, 2, 4, 5, \dots$$

and so

$$\cos\theta = 0, \frac{1}{2} \text{ or } 1;$$

there are no values of $\cos\theta$ for which $4^{\cos\theta} > 4$.

We can now find the possible values of θ :

- $\cos\theta = 0$ gives $\theta = 90^\circ, 270^\circ, 450^\circ, \dots$
- $\cos\theta = \frac{1}{2}$ gives $\theta = 60^\circ, 300^\circ, 420^\circ, \dots$
- $\cos\theta = 1$ gives $\theta = 0^\circ, 360^\circ, \dots$

Collecting these solutions and arranging them in increasing order gives $\theta = 0^\circ, 60^\circ, 90^\circ, 270^\circ, 300^\circ, \dots$

We are told that there are exactly three solutions in the range $0^\circ \leq \theta \leq x^\circ$. Therefore $x \geq 90$ to get the third solution, and $x < 270$ to avoid getting the fourth solution. This gives the answer $90 \leq x < 270$, which is option B.

Question 20

We can combine the logarithms on the right and rearrange the left hand side to give

$$\log_{10}(x - y)^2 = \log_{10}((2 - 2x)(y + 5))$$

and so

$$(x - y)^2 = (2 - 2x)(y + 5).$$

Expanding the brackets gives

$$x^2 - 2xy + y^2 = 2y + 10 - 2xy - 10x$$

which rearranges to

$$x^2 + y^2 + 10x - 2y = 10.$$

Completing the squares gives

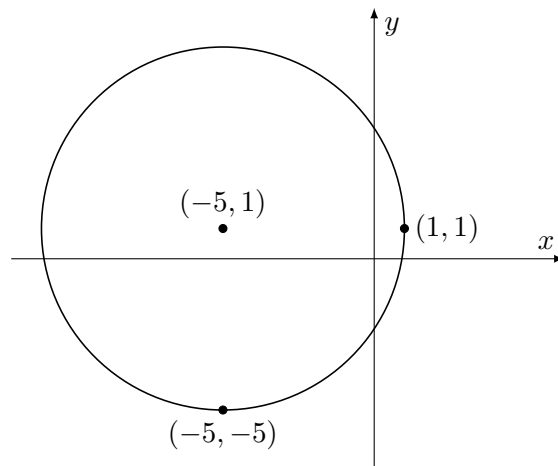
$$(x + 5)^2 + (y - 1)^2 = 36$$

which is a circle with centre $(-5, 1)$ and radius 6.

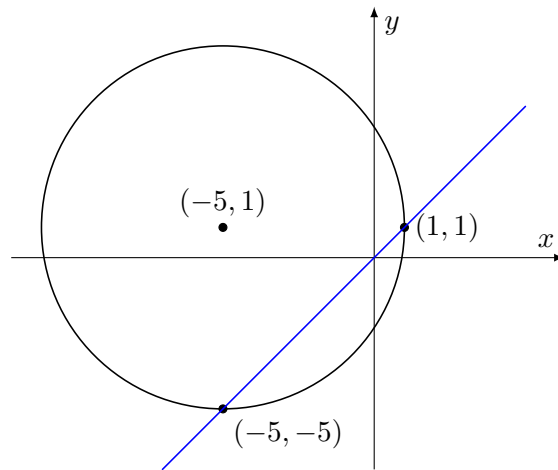
The obvious answer is therefore 12π , but we must take care: does every point on the circle satisfy the original equation? The manipulations we have performed make assumptions; in particular, for the logarithms to be defined, we require $x - y > 0$, $2 - 2x > 0$ and $y + 5 > 0$, which we can rearrange to

$$x > y, \quad x < 1 \quad \text{and} \quad y > -5$$

Let us sketch the circle and these three inequalities. Here is the circle with two points on the circumference marked:



The restriction $x < 1$ holds for all of the points on the circle except for the single point $(1, 1)$, and the restriction $y > -5$ holds everywhere except for $(-5, -5)$. The restriction $x > y$ is more significant for us. We can draw the line $x = y$ on our sketch:



The region $x > y$ is below this line, and we see that only part of the circle is included in the region. Since the points of intersection of the line $x = y$ with the circle are at $(1, 1)$ and $(-5, -5)$, it is clear that exactly one quarter of the circle lies in the region $x > y$. Therefore the length of the curve with the given equation is $\frac{1}{4}$ of the circumference of the circle, that is, $\frac{1}{4} \times 12\pi = 3\pi$, and the correct option is D.

This document was initially designed for print and as such does not reach accessibility standard WCAG 2.1 in a number of ways including missing text alternatives and missing document structure.

If you need this document in a different format please email admissionstesting@cambridgeassessment.org.uk telling us your name, email address and requirements and we will respond within 15 working days.

This document contains maths equations and symbols which at present we are not able to produce adequately for accessibility. We are working to improve this.

We are Cambridge Assessment Admissions Testing, part of the University of Cambridge. Our research-based tests provide a fair measure of skills and aptitude to help you make informed decisions. As a trusted partner, we work closely with universities, governments and employers to enhance their selection processes.

Cambridge Assessment
Admissions Testing
The Triangle Building
Shaftesbury Road
Cambridge
CB2 8EA
United Kingdom

Admissions tests support: admissionstesting.org/help