


**Photograph 1** For use in Question 2**GCE AS/A Level**



1212/01-B



S17-1212-01B

**GEOLOGY – GL2a**  
**Investigative Geology**

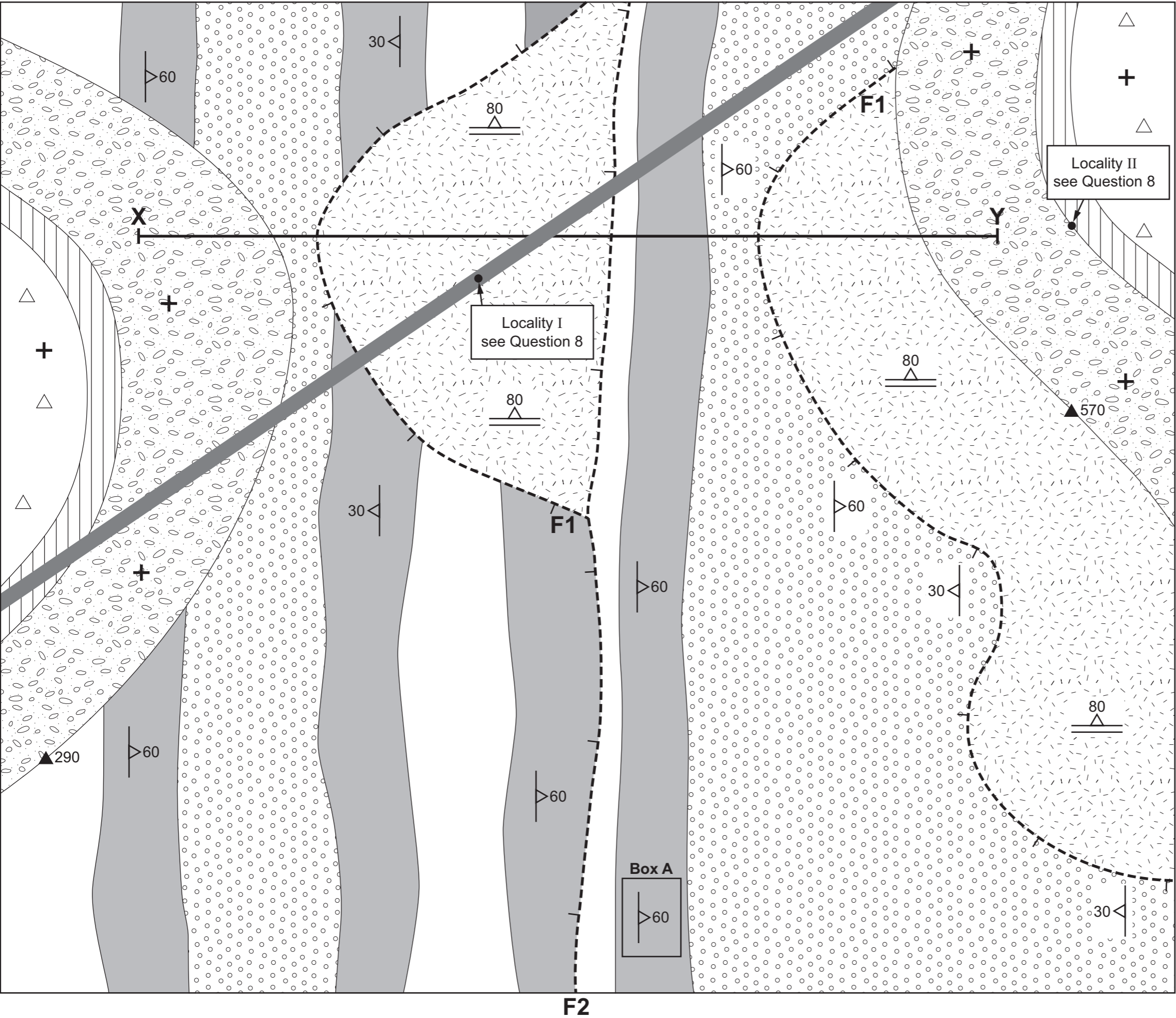
WEDNESDAY, 26 APRIL 2017 – MORNING

**Resource Sheet****Photograph 2** For use in Question 2**Photograph 3** For use in Question 3**Photograph 4** For use in Question 8**Photograph 5** For use in Question 8**Acknowledgements:**Photograph 1: <https://upload.wikimedia.org/wikipedia/commons/7/70/>

Photograph 2: none needed

Photograph 3: <http://www.geoffbroughton.talktalk.net/>Photograph 4: <http://www.otago.ac.nz/geology/>Photograph 5: <https://upload.wikimedia.org/wikipedia/commons/2/27/>

Map 1



The rock units are not in order of age.  
Their ornament is not necessarily  
representative of rock type.

- Rock Unit A  
(Specimen A), (Photograph 5)
- Rock Unit B  
(Specimen B)
- Rock Unit C  
(Specimen C), (Photographs 1 and 2)
- Rock Unit D
- Rock Unit E
- Rock Unit G  
(Photograph 4)
- Rock Unit H  
(Specimen H)
- Rock Unit I
- Dip of bed
- Dip of foliation
- Horizontal bed
- Spot Height  
(metres above sea level)
- Locality numbers
- Fault (tick mark indicates  
down throw side)

